

Name: _____ Age: _____ Id: _____ Course: _____

Integrals - Exam 2**Lessons: 41 - 42**

Consulting

Instructions:

- Please begin by printing your Name, your Age, your Student Id , and your Course Name in the box above and in the box on the solution sheet.
- You have 90 minutes (class period) for this exam.
- You can not use any calculator, computer, cellphone, or other assistance device on this exam. However, you can set our flag to ask permission to consult your own one two-sided-sheet notes at any point during the exam (You can write concepts, formulas, properties, and procedures, but questions and their solutions from books or previous exams are not allowed in your notes).
- Each multiple-choice question is worth 5 points and each extra essay-question is worth from 0 to 5 points. (Even a simple related formula can worth some points).
- Set up your flag if you have a question.
- Relax and use strategies to improve your performance.

Exam Strategies to get the best performance:

- Spend 5 minutes reading your exam. Use this time to classify each Question in (E) Easy, (M) Medium, and (D) Difficult.
- Be confident by solving the easy questions first then the medium questions.
- Be sure to check each solution. In average, you only need 30 seconds to test it. (Use good sense).
- Don't waste too much time on a question even if you know how to solve it. Instead, skip the question and put a circle around the problem number to work on it later. In average, the easy and medium questions take up half of the exam time.
- Solving the all of the easy and medium question will already guarantee a minimum grade. Now, you are much more confident and motivated to solve the difficult or skipped questions.
- Be patient and try not to leave the exam early. Use the remaining time to double check your solutions.

1. Given:

I. Integration by Parts is always a better method to solve integrals than the Table of Integrals and Substitution.

II. Integration by parts is a powerful technique to solve a much larger set of functions.

III. There are two ways to do Integration by Parts: The Standard Method and the Column Method.

- a) Only I and II are correct.
- b) Only I and III are correct.
- c) Only II and III are correct.
- d) I, II, and III are correct.
- e) None of the above.

2. The formula of Integral by Parts is:

- a) $\int u dv = uv - \int v du$, where u and v are differential functions.
- b) $\int u dv = uv + \int v du$, where u and v are differential functions.
- c) $\int u dv = uv - \int v du$, where u and v are any real functions.
- d) $\int u dv = uv + \int v du$, where u and v are any real functions.
- e) None of the above.

3. What is very important to know about the Integration by Parts:

I. The Standard Method is a useless technique that the student must be luck to be successful in the exams.

II. To solve the integral $\int u dv$ using the Integration by Parts, students should to identify u and dv properly to converge to an easier Integral.

III. Although the Standard Method solution is long and requires time, it is a common tool in exams.

Then:

- a) Only I and II are correct.
- b) Only I and III are correct.
- c) Only II and III are correct.
- d) I, II, and III are correct.
- e) None of the above.

4. What is very important to know about the Column Method (Tabular Method) to solve integral by parts:

- a) Sometimes the standard Method to solve integral by parts needs to be applied several times to find an easier integral. The column integration method accomplishes this in a fast and organized table.
- b) The Standard Method solution is easier than the Column Method to solve integrals by parts.
- c) The Column Method is the most used in all universities around the world and the Standard Method will be no longer be used.
- d) The Column Method is complex, long and requires a lot of time to be used in exams.
- e) The Column Method is prohibited to be used in certain universities because several professors don't knowing it.

5. To solve the integral $\int u dv$ by integration by parts (Standard or Column methods) effectively, students should to identify the function u properly.

Given E: Exponential, T: Trigonometric, L: Logarithmic, and P: Polynomial. A rule of thumb to choose smart the function u is:

- a) ETLP
- b) LTPE
- c) EPTL
- d) ETPL
- e) LPTE

6. Solve the following integral:

$$I = \int_0^1 x^4 dx$$

- a) $\frac{1}{5}$ b) $\frac{1}{4}$ c) $\frac{1}{3}$ d) $\frac{1}{2}$ e) 1

7. Solve the following integral:

$$I = \int e^{x^5} x^4 dx$$

- a) $I = \frac{1}{2}e^{x^2} + c$
- b) $I = \frac{1}{3}e^{x^3} + c$
- c) $I = \frac{1}{4}e^{x^4} + c$
- d) $I = \frac{1}{5}e^{x^5} + c$

e) None of the above.

8. Solve the following integral:

$$I = \int e^{-x} x^2 dx$$

a) $I = x e^x - e^x + c$

b) $I = -x e^x - e^x + c$

c) $I = x^2 e^x - 2x e^x + 2e^x + c$

d) $I = +x^2 e^x + 2x e^x + 2e^x + c$

e) None of the above.

9. Solve the following integral:

$$I = \int x \sin x dx$$

a) $I = -x \cos x + \sin x + c$

b) $I = x \sin x + \cos x + c$

c) $I = -x^2 \cos x + 2x \sin x + 2 \cos x + c$

d) $I = x^2 \sin x + 2x \cos x - 2 \sin x + c$

e) None of the above.

10. Solve the following integral:

$$I = \int x \ln x dx$$

a) $I = \frac{x^2}{2} \ln x - \frac{x^2}{4} + c$

b) $I = \frac{x^3}{3} \ln x - \frac{x^3}{9} + c$

c) $I = \frac{x^4}{4} \ln x - \frac{x^4}{16} + c$

d) $I = \frac{x^5}{5} \ln x - \frac{x^5}{25} + c$

e) None of the above.

11. Solve the following integral:

$$I = \int \sin x e^{-x} dx$$

a) $I = \frac{\sin x e^x}{2} - \frac{\cos x e^x}{2} + c$

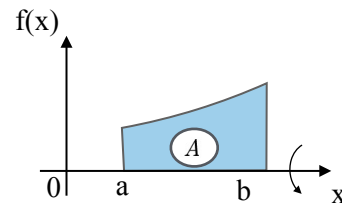
b) $I = -\frac{\sin x e^{-x}}{2} + \frac{\cos x e^{-x}}{2} + c$

c) $I = \frac{\cos x e^x}{2} + \frac{\sin x e^x}{2} + c$

d) $I = -\frac{\cos x e^{-x}}{2} + \frac{\sin x e^{-x}}{2} + c$

e) None of the above.

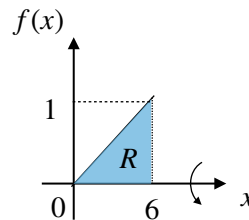
12. Rotating an area ($A \neq 0$) over the x -axis we have:



a) Point b) Line c) Area d) Empty Space e) Volume.

13. Find the volume (V) generated by rotating the following region (R) over the x -axis. Given

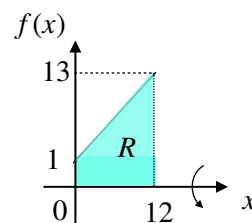
$$f(x) = \frac{x}{6}$$



a) π b) 2π c) 3π d) 4π e) None of the above.

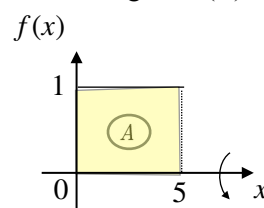
14. Find the volume (V) generated by rotating the following region (R) over the x -axis. Given

$$f(x) = x + 1$$



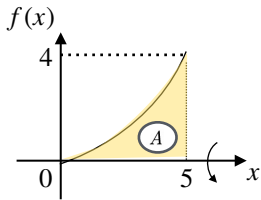
a) 21π b) 114π c) 333π d) 732π e) None of the above.

15. Find the volume (V) generated by rotating the following area (A) over the x -axis. Given $f(x) = 1$.



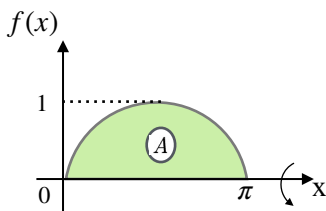
a) π b) 2π c) 3π d) 4π e) None of the above.

16. Find the volume (V) generated by rotating the following area (A) over the x -axis. Given $f(x) = x^2$.



- a) $\frac{\pi}{5}$ b) $\frac{2^5 \pi}{5}$ c) $\frac{3^5 \pi}{5}$ d) $\frac{4^5 \pi}{5}$ e) $5^4 \pi$.

17. Find the volume (V) generated by rotating the following area (A) over the x -axis. Given $f(x) = \sin x$.



- a) π^2 b) $\frac{\pi^2}{2}$ c) $\frac{3\pi^2}{2}$ d) $2\pi^2$ e) $4\pi^2$.

18. Find $I = \int_0^1 e^{\ln x} dx$.

- a) $\frac{1}{2}$ b) $\frac{1}{4}$ c) 1 d) 2. e) None of the above.

19. Find $I = \int_0^{\frac{\pi}{4}} 2 \sin x \cos x dx$.

- a) $\frac{1}{4}$ b) $\frac{1}{2}$ c) 1 d) 2. e) None of the above.

20. The group of functions whose their derivatives is the same that their Integrals is:

- a) $f(x) = C \sin x$, where $C \in \mathbb{R}$.
 b) $f(x) = C \ln x$, where $C \in \mathbb{R}$.
 c) $f(x) = Cx$, where $C \in \mathbb{R}$.
 d) $f(x) = Ce^x$, where $C \in \mathbb{R}$.
 e) None of the above.

Name: _____ Age: _____ Id: _____ Course: _____

PART 2: SOLUTIONS**Consulting****Multiple-Choice Answers**

Questions	A	B	C	D	E
1					
2					
3					
4					
5					
6					
7					
8					
9					
10					
11					
12					
13					
14					
15					
16					
17					
18					
19					
20					

Let this section in blank

	Points	Max
Multiple Choice		100
Extra Points		25
Consulting		10
Age Points		25
Total Performance		160
Grade		A

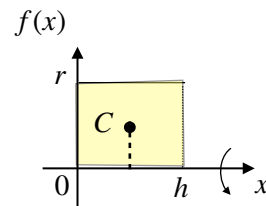
Extra Questions

21. The famous theorem of Pappus states that the volume V of a solid of revolution generated by the revolution of a area A over the x axis is equal to:

$V = 2\pi dA$, where d is the distance between x -axis and the centroid (C).

Show that the area for a cylinder is $V = \pi r^2 h$. Hint:

$$d = \frac{r}{2}$$



22. Show that $I = \int \ln x \, dx = x \ln x - x + c$, where $x > 0$. Hint: Use the Column Method ($D = \ln x$ and $I = 1$)

*23. Find $I = \int x^2 \cdot x \, dx$.

a) Standard Method

b) Column Method

Choose one method to receive full credit (10 points)

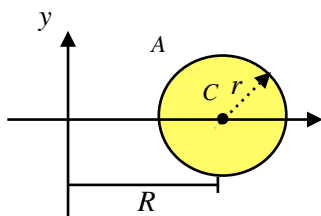
Both methods to receive (20 points).

24. Find $I = \int_{\pi}^e x^2 dx$.

*25. Pappus's formula challenge.

Find the Torus volume by rotating a circle (radius = r) over y -axis. Given the distance between the center and the y -axis is R .

$V = 2\pi dA$, where d is the distance between y -axis and the centroid (C) and A is the Area of the circle..



Note: This is a different concept in Solids of Revolution, thus draw a smile face to receive a full credit (5 points), but if you find the Torus volume you will receive an extra credit (5 points).